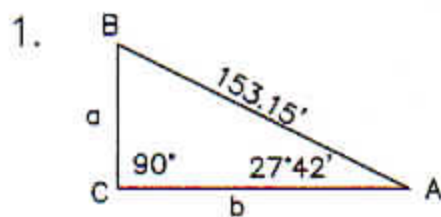
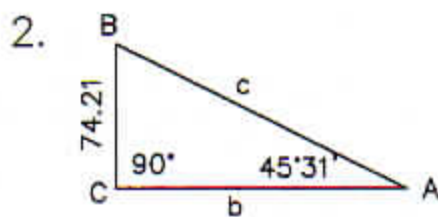


SHOW YOUR WORK ON ALL PROBLEMS.

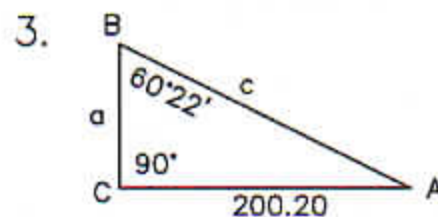
For problems 1 thru 9, solve all angles and distances



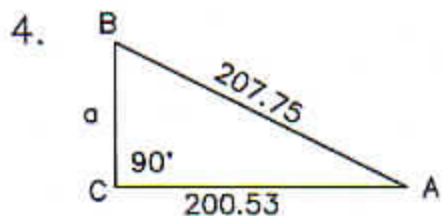
a=  
b=  
B=



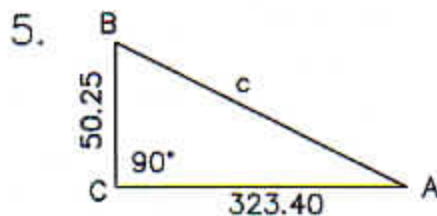
c=  
b=  
B=



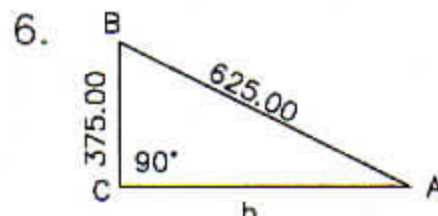
c=  
a=  
A=



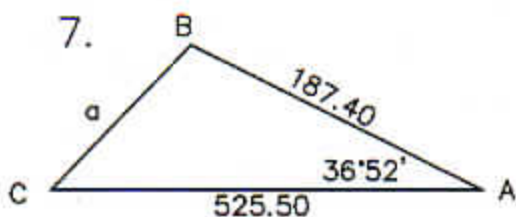
a=  
A=  
B=



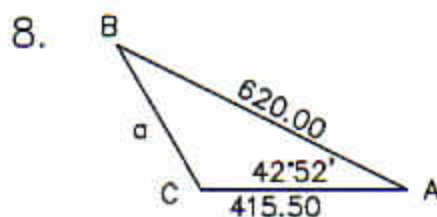
c=  
A=  
B=



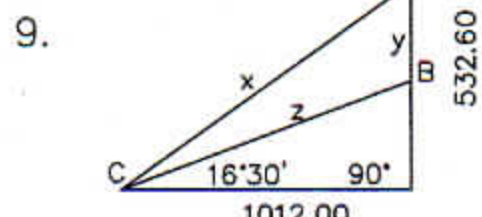
b=  
A=  
B=



a=  
B=  
C=



a=  
B=  
C=



A=  
B=  
C=  
x=  
y=  
z=